
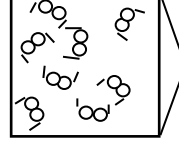
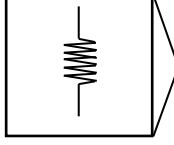
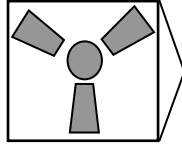
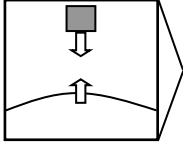
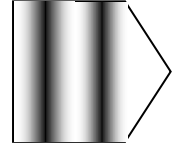
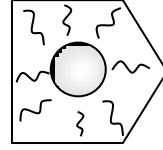
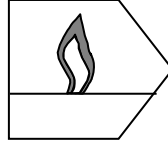
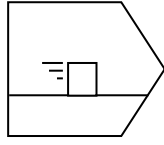



Physik * Jahrgangsstufe 8 * Energiearten und Energiewandler

Welche **Energiearten** werden durch die Bilder veranschaulicht?
 Worin unterscheiden sich die Energiearten in den beiden Reihen?



Bestimmte Geräte wandeln die Energiearten um. Welche Energiearten wandeln die abgebildeten **Energiewandler** ineinander um?

Motor

Heizung

Lampe

Mikrophon

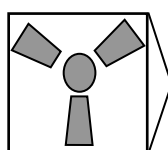
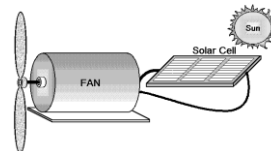
Generato

Radio

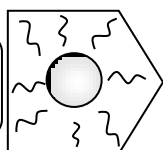
Turbine

Lautsprecher

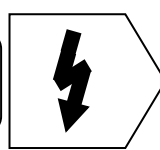
Das folgende **Energieflussdiagramm** zeigt, wie die Sonne einen Ventilator antreibt.



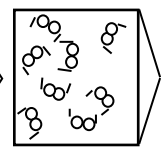
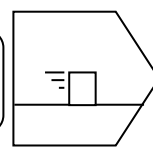
Sonne



Solarzelle

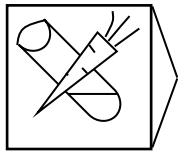


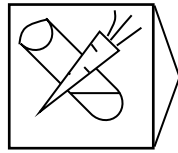
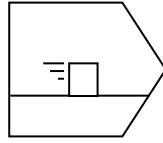
Ventilator


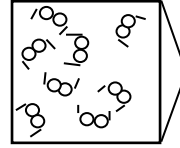
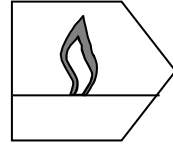



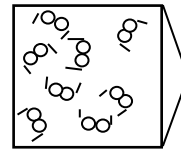
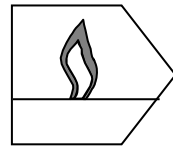
Physik * Jahrgangsstufe 8 * Energiearten und Energiewandler

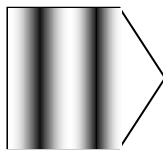
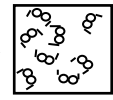

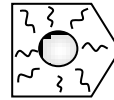
Notiere passende Energiewandler!

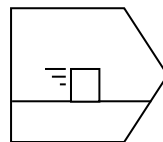







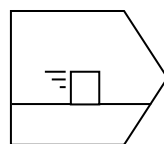
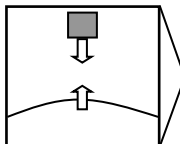
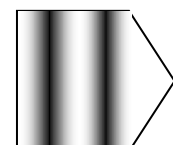



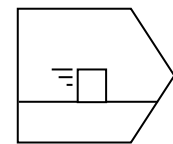


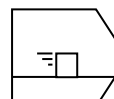




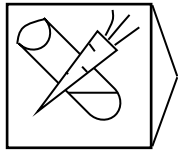




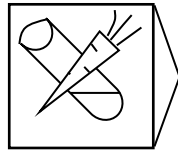
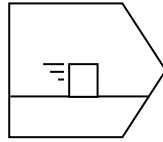





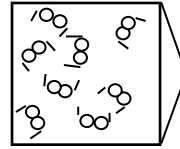
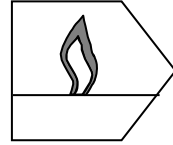
Physik * Jahrgangsstufe 8 * Energiearten und Energiewandler * Lösungen




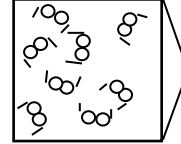
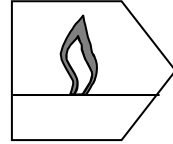
Motor



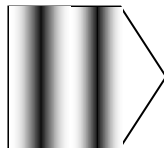
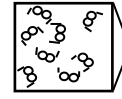
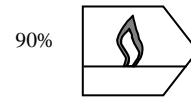
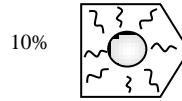
Heizung



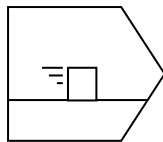

Heizung





Lampe



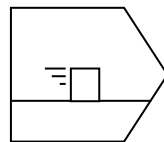
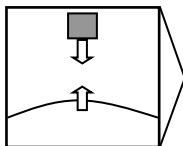
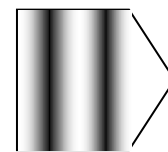
Mikrophon




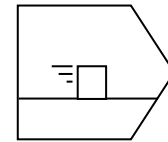
Generato



Radio oder
Lautsprecher



Turbine



Elektromotor

